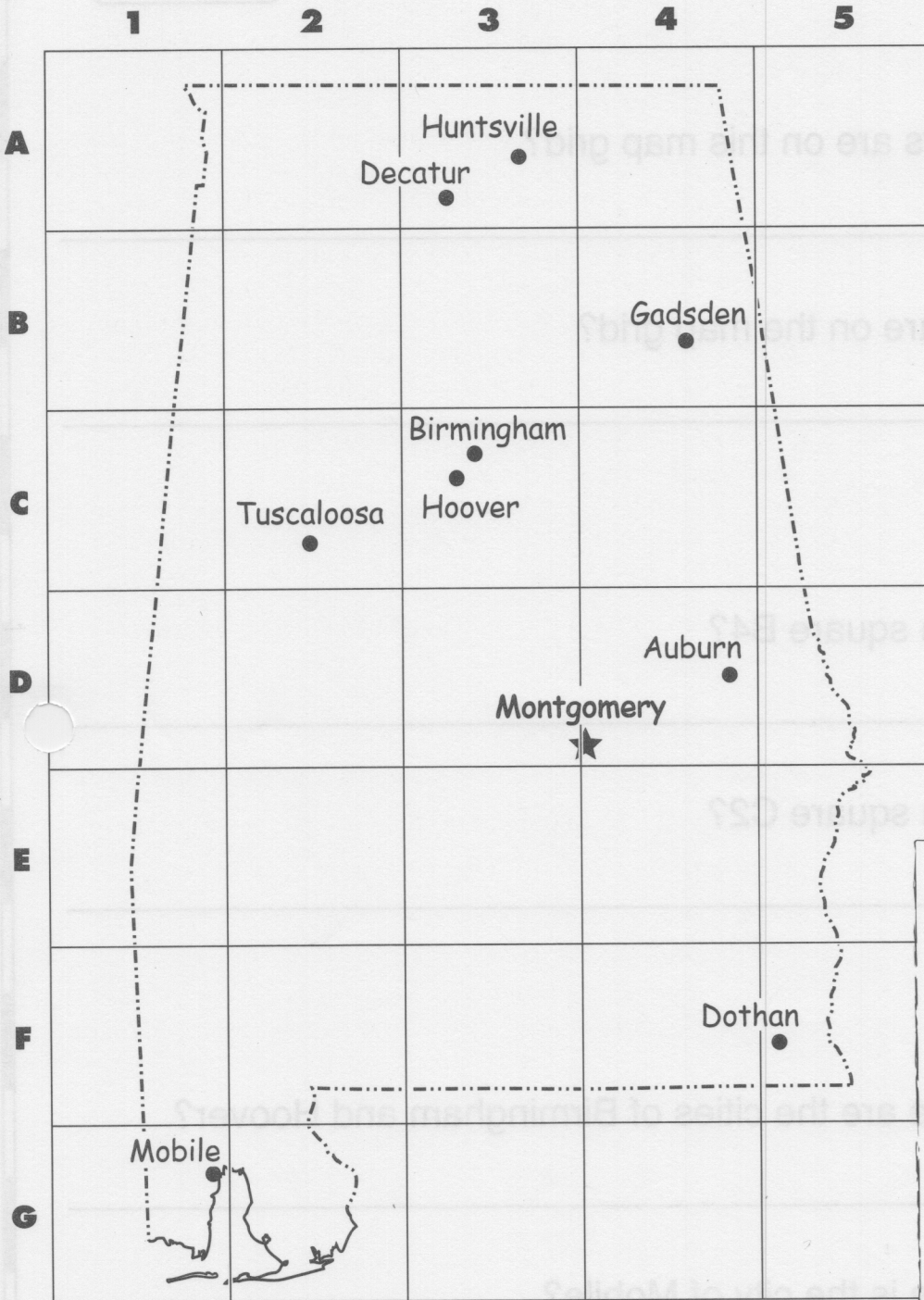



A Map Grid and a Map Index

Alabama




Map Key

- ★ state capital
- city
- - - - state border



Index

Auburn	D4
Birmingham	C3
Decatur	A3
Dothan	F5
Gadsden	B4
Hoover	C3
Huntsville	A3
Mobile	G1
Montgomery ..	D3, D4
Tuscaloosa	C2



A Map Grid and a Map Index



Monday

1. Which numbers are on this map grid?

2. Which letters are on the map grid?

Tuesday

1. Which city is in square B4?

2. Which city is in square C2?

Wednesday

1. In which square are the cities of Birmingham and Hoover?

2. In which square is the city of Mobile?

A Map Grid and a Map Index



Thursday

1. Huntsville shares a square with which other city?

2. In which square is Decatur?

Friday

1. What is the capital of Alabama? In which two squares is it?

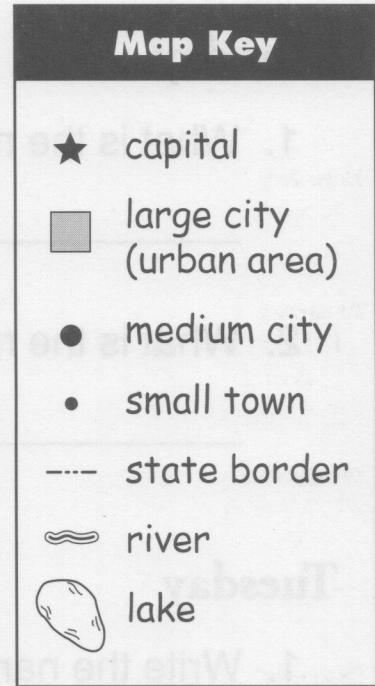
2. What does the map index show?

Challenge

On the map:

- Color square E2 red.
- Color square G4 green.

A Map Key



Can you name the states that border Illinois?

1. _____
2. _____
3. _____
4. _____
5. _____



A Map Key

Monday

1. What is the name of the capital city?

2. What is the name of the large city shown on the map?

Tuesday

1. Write the name of each medium-size city.

2. Write the name of each small town.

Wednesday

1. Write the names of the two rivers that are borders.

2. Write the names of the two rivers that are not borders.



A Map Key

Thursday

1. Write the name of the medium-size city that is close to the Wisconsin border.

2. Write the name of the lake that shares a border with Illinois.

Friday

1. Write the name of the large city that shares a border with Lake Michigan.

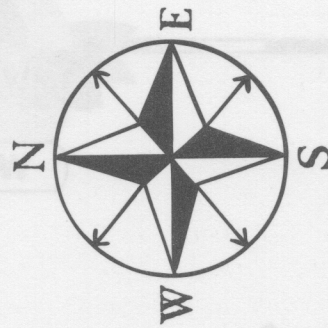
2. Write the name of the border state that is east of Decatur and Aurora.

Challenge

On the map, write the names the states that border Illinois.

Map Key

- ★ capital
- city



Scale

1/2 inch = 50 miles
 1 inch = 100 miles
 1 1/2 inches = 150 miles
 2 inches = 200 miles

Amarillo ●

Abilene ●

Midland ●

El Paso ●

Dallas ●

TEXAS

Austin ★

San Antonio ●

Houston ●

Corpus Christi ●

Brownsville ●

Houston is about _____ miles from Brownsville.

Texas is the 2nd largest state in the United States.



A Map Scale

Monday

1. How many cities are shown on this map?

2. What is the capital of Texas?

Tuesday

1. Texas is the _____ largest state in the United States.

2. Is Amarillo in northern or southern Texas?

Wednesday

1. On the map scale, $\frac{1}{2}$ inch = _____ miles.
2. On the map scale, 1 inch = _____ miles.



A Map Scale

Thursday

1. Is El Paso in eastern or western Texas?

2. Which city shown on the map is the farthest south?

Friday

1. On the map, El Paso is about _____ inches from Abilene.

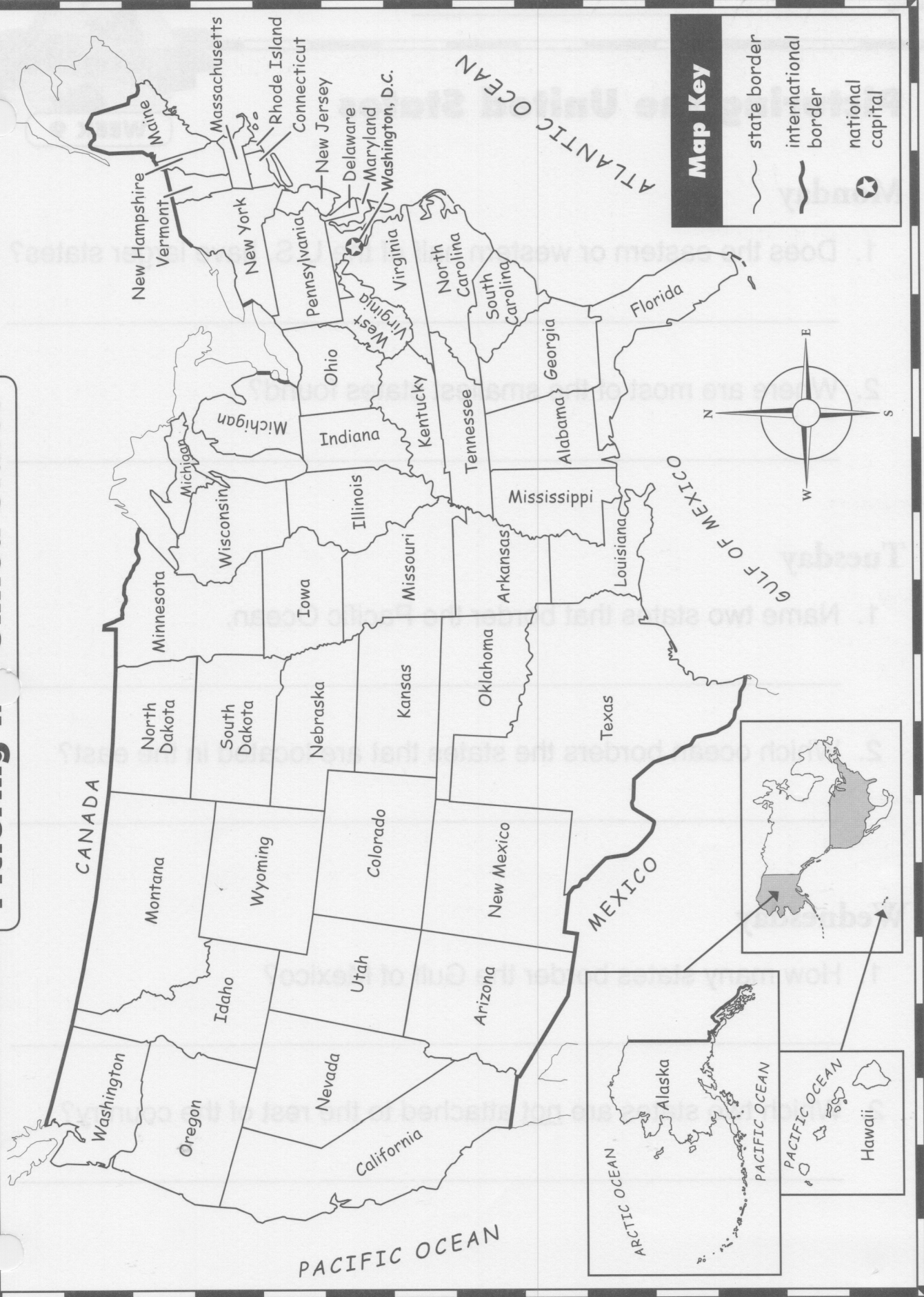
2. About how many miles is El Paso from Abilene?

Challenge

Measure the distance in inches between Houston and Brownsville. Use the scale to find about how many miles that represents. Write your answer on the map page.

Picturing the United States

Name _____





Picturing the United States

WEEK 9

Monday

- Does the eastern or western half of the U.S. have larger states?

- Where are most of the smallest states found?

Tuesday

- Name two states that border the Pacific Ocean.

- Which ocean borders the states that are located in the east?

Wednesday

- How many states border the Gulf of Mexico?

- Which two states are not attached to the rest of the country?



Picturing the United States

WEEK 9

Thursday

- Which country and which oceans border Alaska?

- Are the Hawaiian Islands north, south, east, or west of Alaska?

Friday

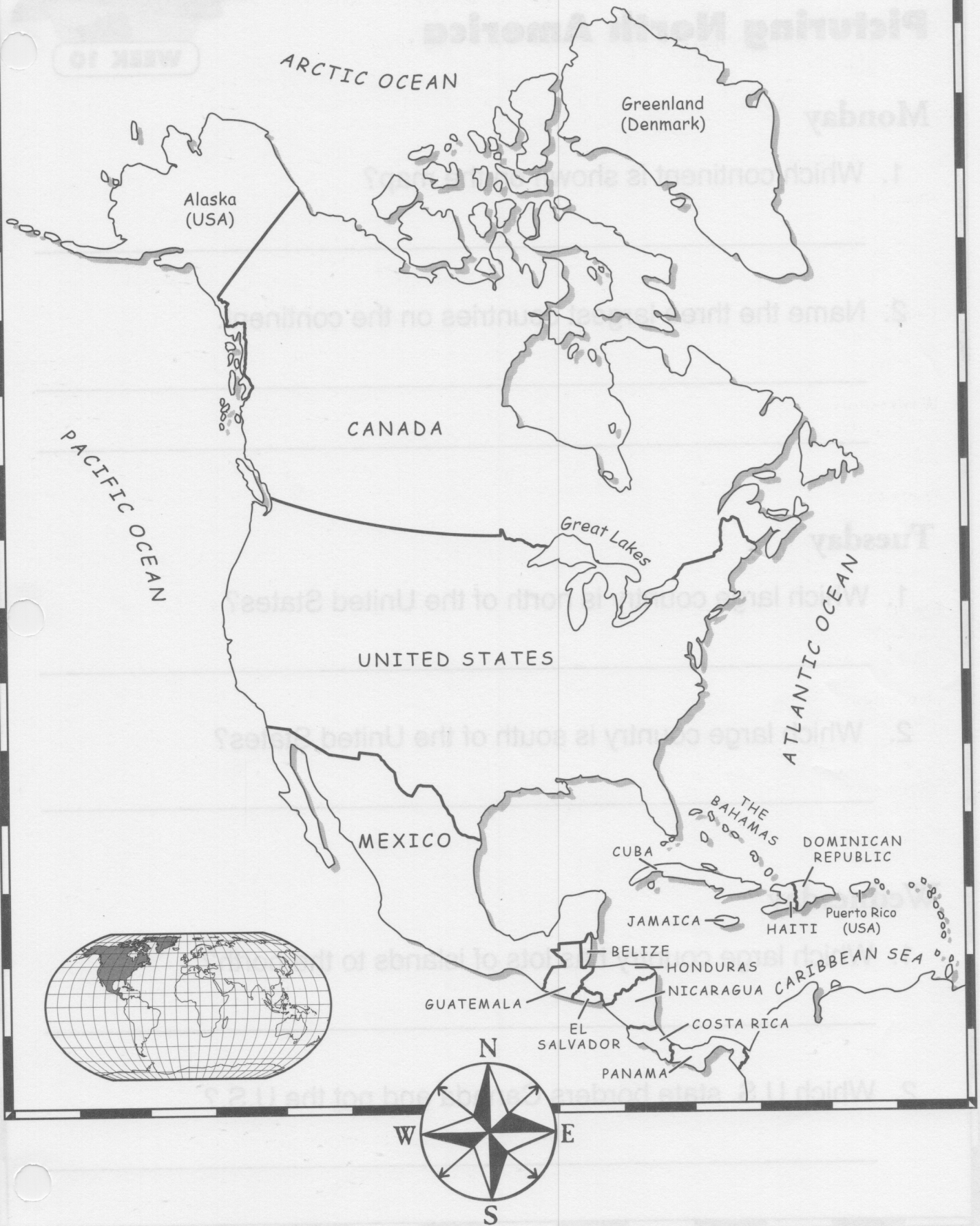
- Is Canada north or south of the United States?

- Is Mexico north or south of the United States?

Challenge

Close your eyes and picture the map of the United States. On a piece of blank paper, draw a map of the outline shape of the United States. Look at the real map to see how you did.

Picturing North America



Picturing North America

Monday

1. Which continent is shown on the map?

2. Name the three largest countries on the continent.

Tuesday

1. Which large country is north of the United States?

2. Which large country is south of the United States?

Wednesday

1. Which large country has lots of islands to the north?

2. Which U.S. state borders Canada and not the U.S.?

Picturing North America

Thursday

1. How many oceans border North America? Name them.

2. Name the two countries that border southern Mexico.

Friday

1. Name the largest island country east of Mexico.

2. Name the continent that is south of North America.

Challenge

On the map, trace the outline shape of North America in dark red. Place a blank piece of paper over the map. Trace over the lines that show through onto the blank piece of paper. Look at your drawing of North America. Close your eyes and make a mental picture of the shape of North America.