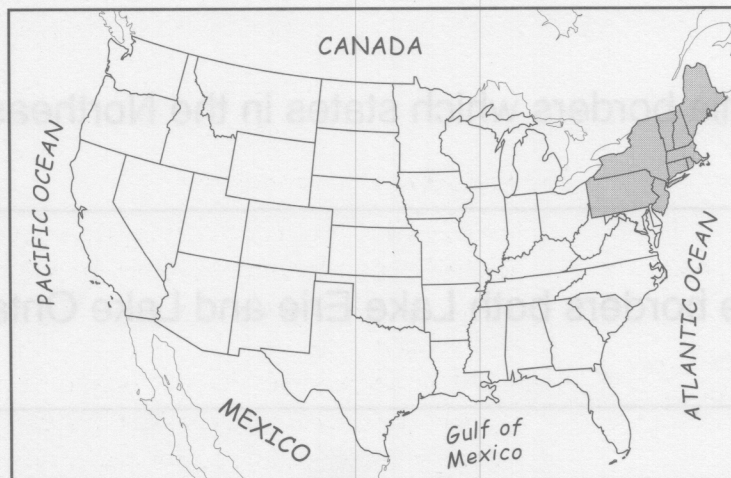
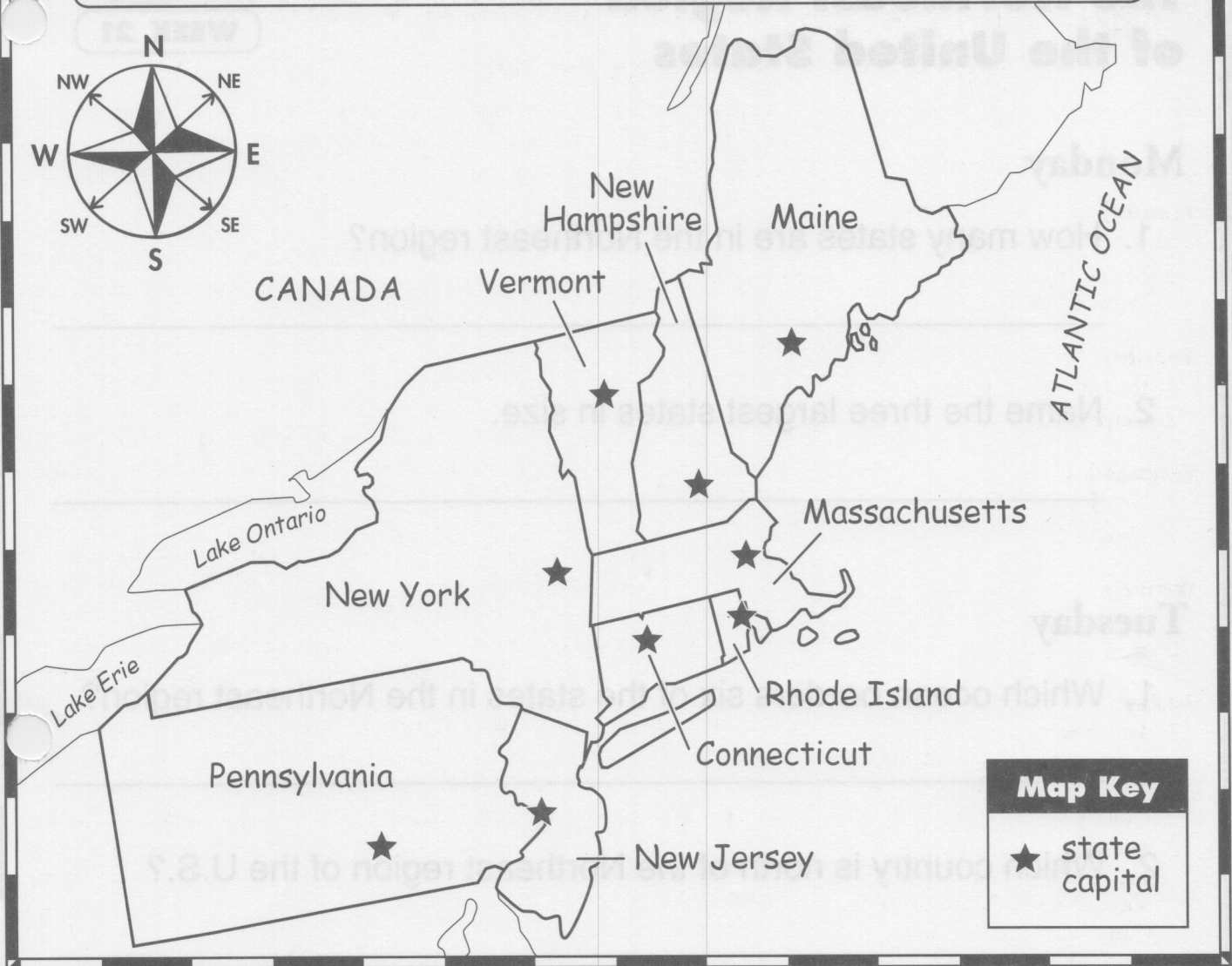


The Northeast Region of the United States



The Northeast Region of the United States

Monday

- How many states are in the Northeast region?

- Name the three largest states in size.

Tuesday

- Which ocean borders six of the states in the Northeast region?

- Which country is north of the Northeast region of the U.S.?

Wednesday

- Pennsylvania borders which states in the Northeast?

- Which state borders both Lake Erie and Lake Ontario?

The Northeast Region of the United States

Thursday

- Which state is the smallest in size?

- Which state borders Canada and only one U.S. state?

Friday

- Name three of the five states that border Massachusetts.

- Name three states that border the Atlantic Ocean.

Challenge

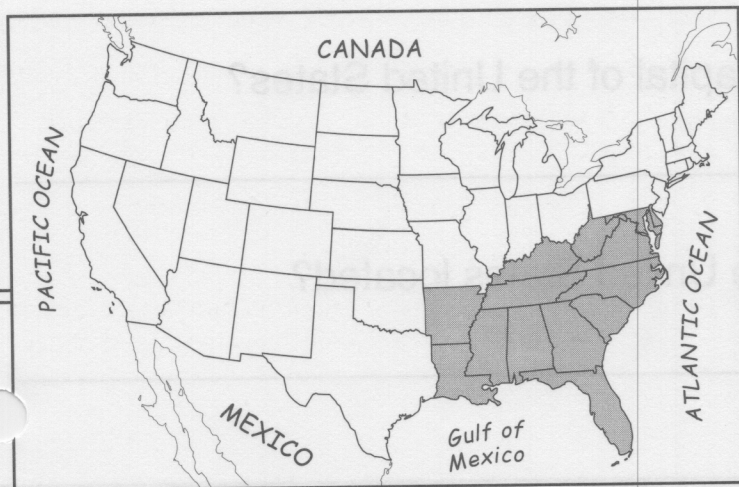

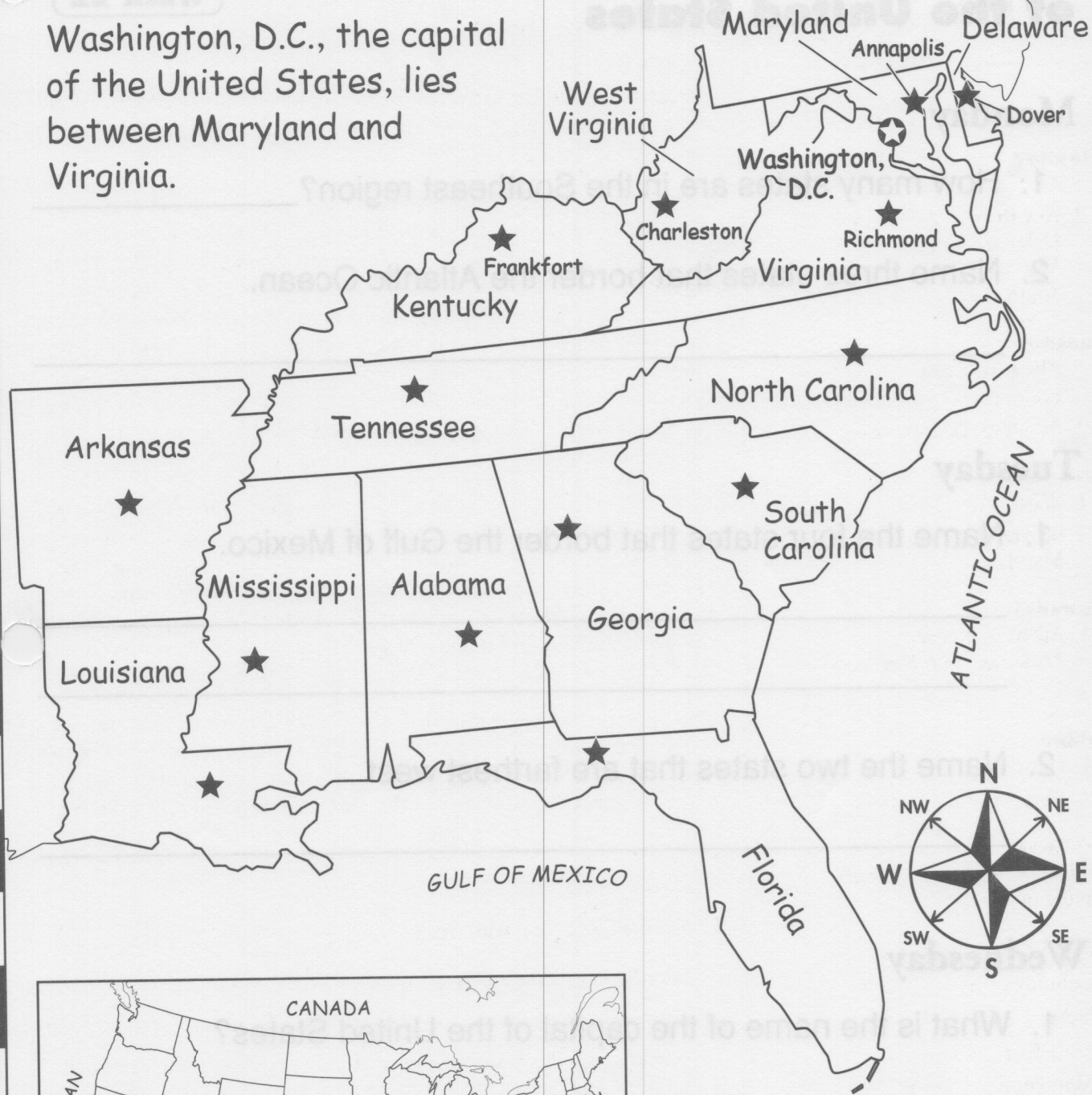
Part 1: Match each capital with each state. The first three have been completed for you. Use a United States map to help you name the others.

State	Capital
1. Connecticut	a. Albany
2. Maine	b. Harrisburg
3. Massachusetts	c. Augusta
4. New Hampshire	d. Hartford
5. New Jersey	e. Montpelier
6. New York	f. Concord
7. Pennsylvania	g. Providence
8. Rhode Island	h. Boston
9. Vermont	i. Trenton

Part 2: On the map, write the name of each capital next to the star on each state.

The Southeast Region of the United States

Washington, D.C., the capital of the United States, lies between Maryland and Virginia.



Map Key

- ★ state capital
- ★ (in circle) national capital

The Southeast Region of the United States

Monday

1. How many states are in the Southeast region? _____
2. Name three states that border the Atlantic Ocean.

Tuesday

1. Name the four states that border the Gulf of Mexico.

2. Name the two states that are farthest west.

Wednesday

1. What is the name of the capital of the United States?

2. Where is the capital of the United States located?

The Southeast Region of the United States

Thursday

1. Which four states do not border any labeled waterway?

2. How many states share a border with Alabama?

Friday

1. Which state is a large peninsula with small islands off its coast?

2. Which two states are located in the northeast tip of the Southeast region?

Challenge

Five state capitals are labeled on the map of the Southeast region. **Ten** are not labeled. Write the names of the nine capitals on the correct states. Use a United States map to help you with the names.

Capitals

Baton Rouge	Little Rock	Raleigh
Columbia	Montgomery	Richmond
Jackson	Nashville	Tallahassee
Atlanta		