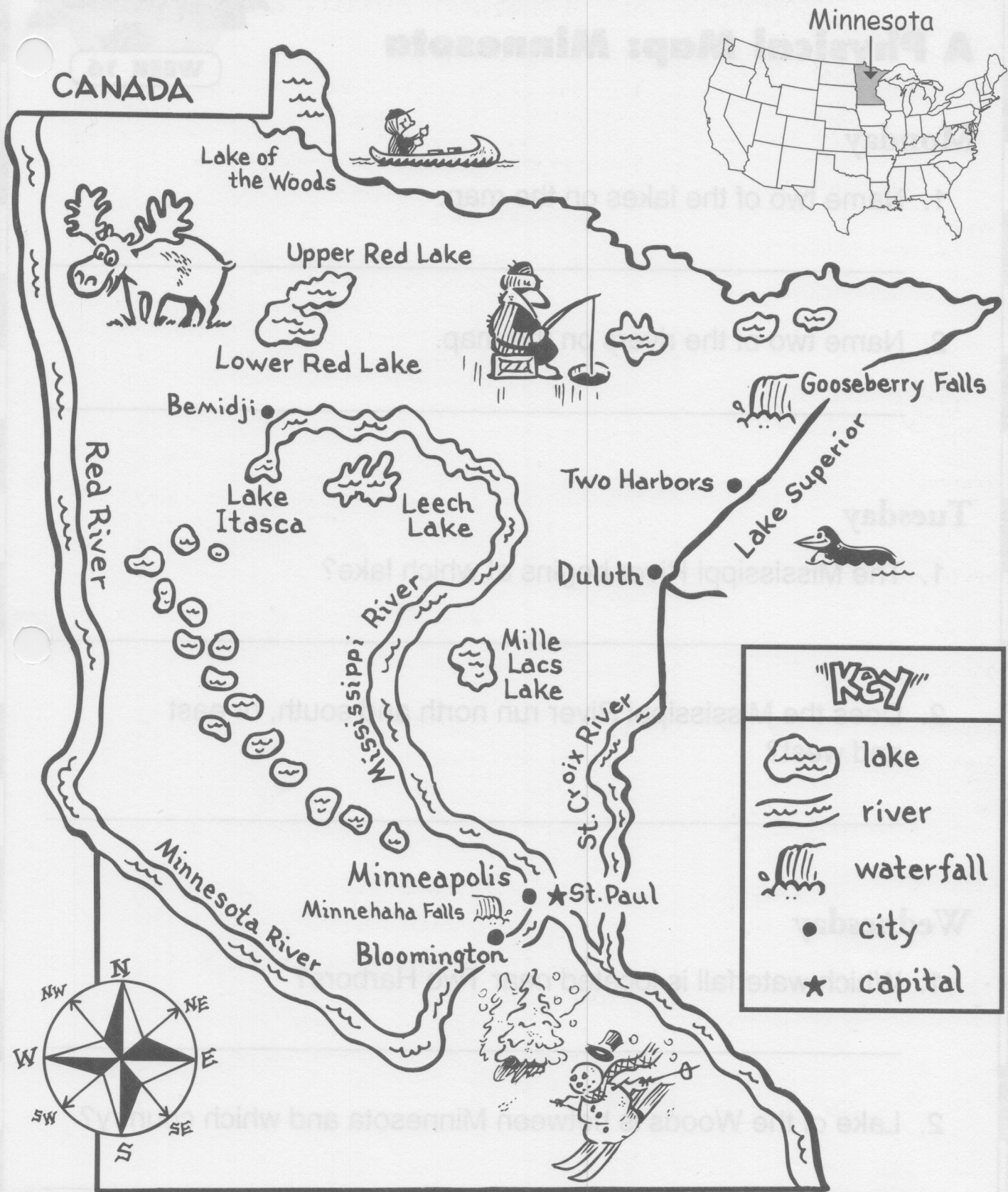


A Physical Map: Minnesota



Minnesota is known as the "Land of 10,000 Lakes."



A Physical Map: Minnesota

Monday

1. Name two of the lakes on the map.

2. Name two of the rivers on the map.

Tuesday

1. The Mississippi River begins at which lake?

2. Does the Mississippi River run north and south, or east and west?

Wednesday

1. Which waterfall is located near Two Harbors?

2. Lake of the Woods is between Minnesota and which country?



A Physical Map: Minnesota

Thursday

1. Which large lake borders northeast Minnesota?

2. Which lake is between the Mississippi and St. Croix Rivers?

Friday

1. Where is the Red River located?

2. What is Minnesota's nickname?

Challenge

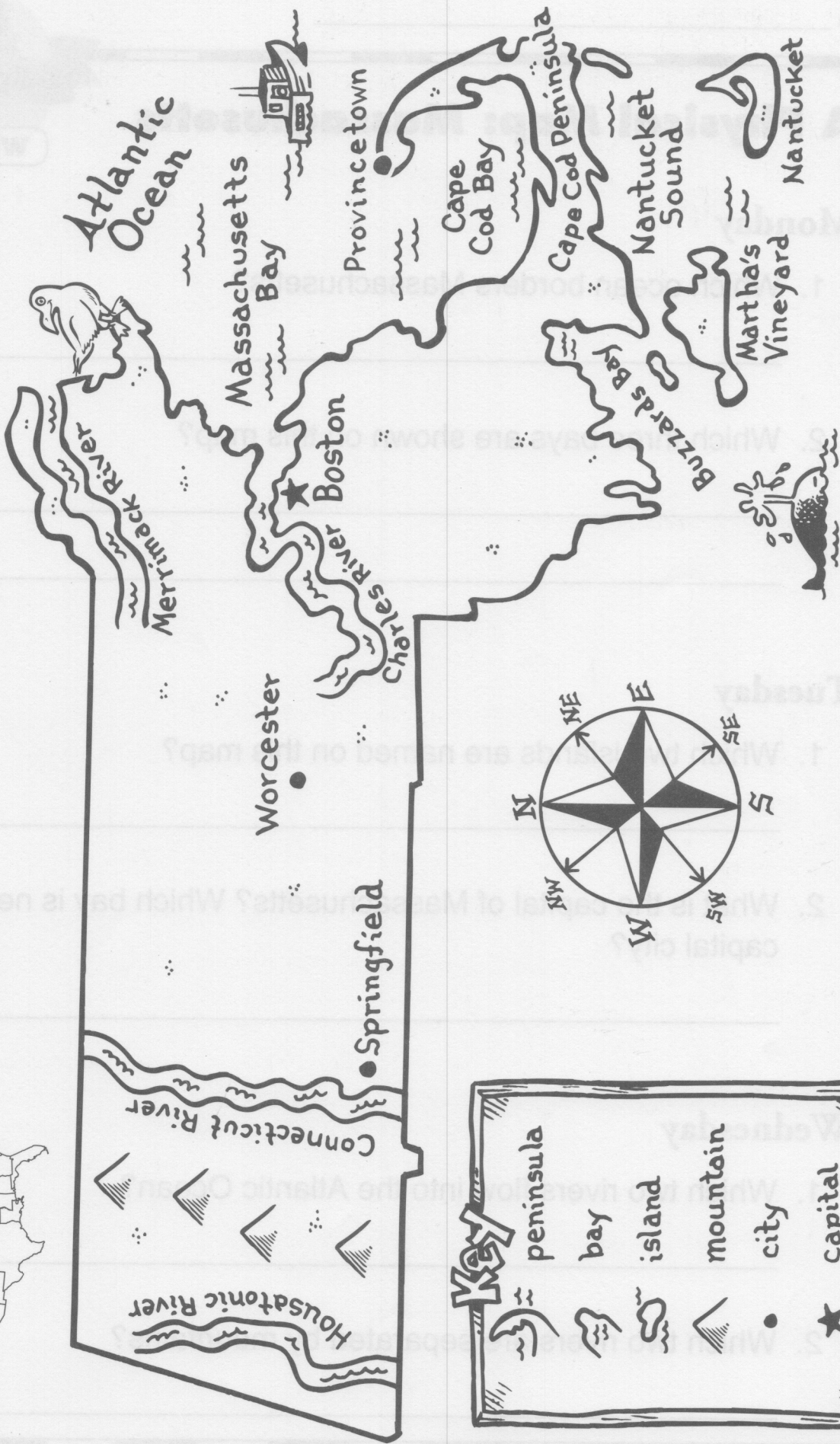
Color all the lakes on the map light blue. Trace all the rivers in dark blue.

A Physical Map: Massachusetts



Massachusetts

Massachusetts has a rugged coastline. Ships anchor in the safe harbors along the bays.



Key

	peninsula		bay		island		mountain		city		capital
--	-----------	--	-----	--	--------	--	----------	--	------	--	---------

Atlantic Ocean



A Physical Map: Massachusetts

Monday

1. Which ocean borders Massachusetts?

2. Which three bays are shown on this map?

Tuesday

1. Which two islands are named on this map?

2. What is the capital of Massachusetts? Which bay is near the capital city?

Wednesday

1. Which two rivers flow into the Atlantic Ocean?

2. Which two rivers are separated by mountains?



A Physical Map: Massachusetts

Thursday

1. Name the peninsula on this map.

2. Name the city located at the tip of the peninsula.

Friday

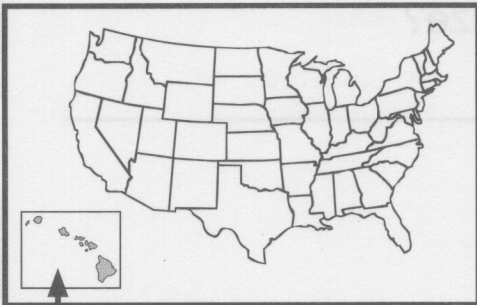
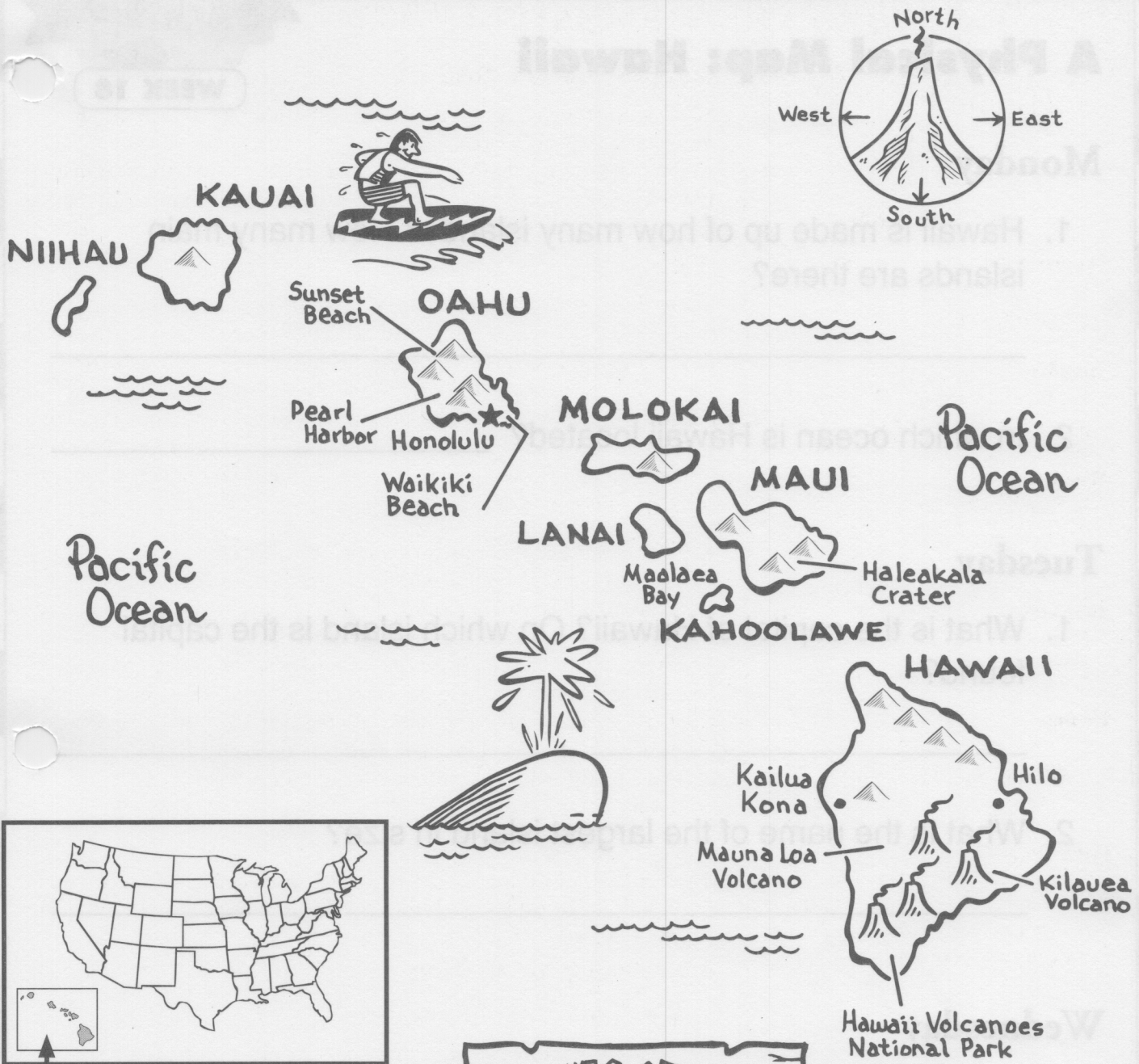
1. What is the coastline of Massachusetts like?

2. Which waterway is between Cape Cod and Martha's Vineyard?

Challenge

On the map page, color the coastline of Massachusetts brown. Trace the rivers in dark blue. Color the Atlantic Ocean with its bays and sound light blue.

A Physical Map: Hawaii



The Hawaiian Islands are about 2,400 miles (3,860 km) southwest of the rest of the United States. There are 132 islands in Hawaii. The eight largest are called the main islands of Hawaii.

Key

- volcano
- island
- mountain
- city
- capital



A Physical Map: Hawaii

WEEK 18

Monday

1. Hawaii is made up of how many islands? How many main islands are there?

2. In which ocean is Hawaii located? _____

Tuesday

1. What is the capital of Hawaii? On which island is the capital found? _____

2. What is the name of the largest island in size? _____

Wednesday

1. Which three islands are closest to Maui?

2. Which main island is smallest in size?



A Physical Map: Hawaii

WEEK 18

Thursday

1. In which direction is Hawaii from the mainland of the U.S.?

2. How far away is the state of Hawaii from the mainland of the U.S.?

Friday

1. How many main islands are northwest of Oahu? How many main islands are southeast of Oahu?

2. Name the two volcanoes on the map. Which one is the most active?

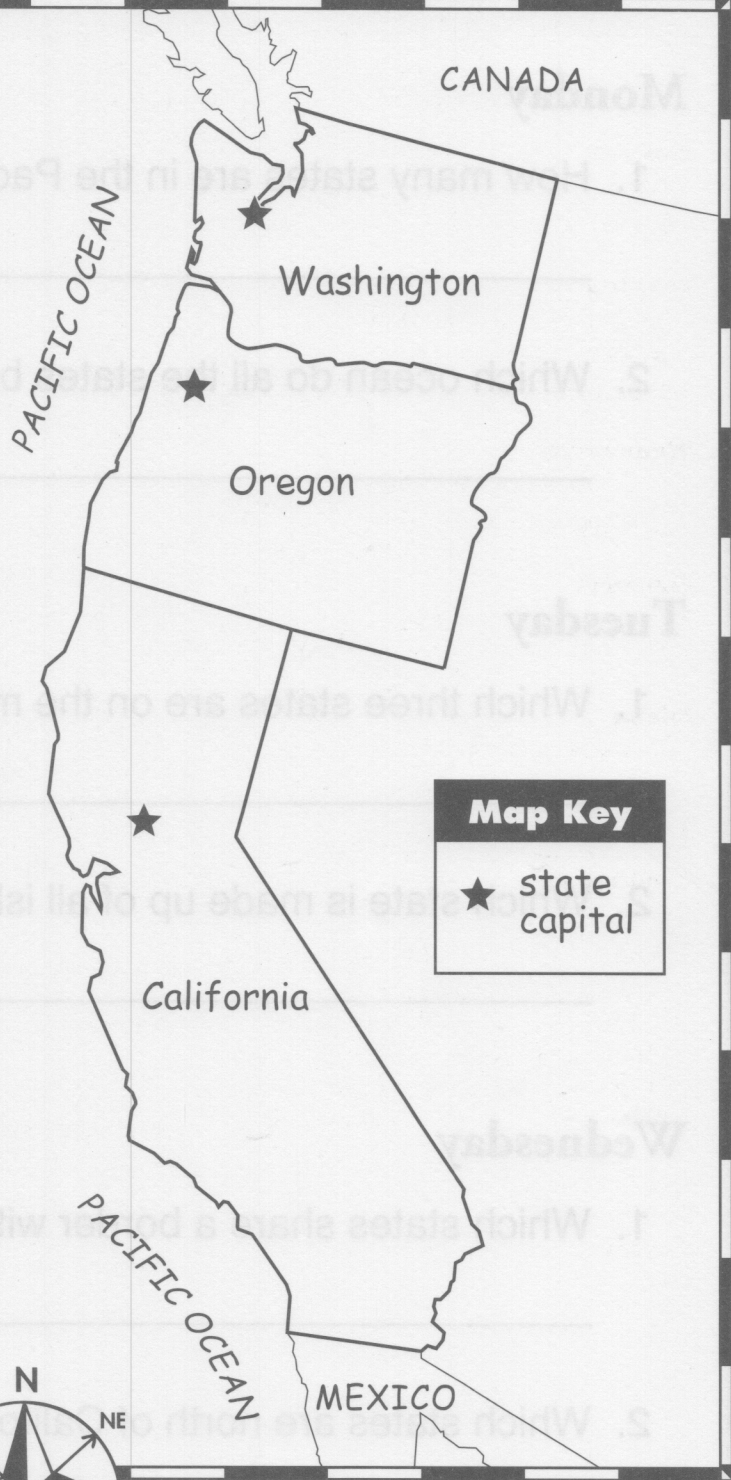

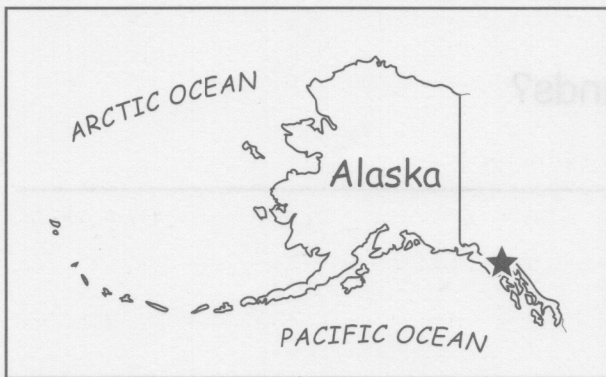
Challenge

On the map page, write the definition of a volcano. Draw a picture of a volcano erupting. Use a picture dictionary to help you.

The Pacific Region of the United States

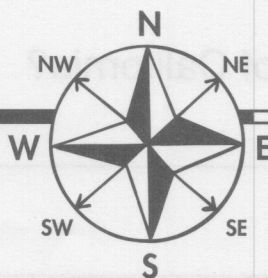


The Hawaiian Islands are about 2,400 miles (3,860 km) southwest of the rest of the United States.



Map Key

★ state capital



The Pacific Region of the United States

Monday

1. How many states are in the Pacific Region?

2. Which ocean do all the states border?

Tuesday

1. Which three states are on the mainland of the U.S.?

2. Which state is made up of all islands?

Wednesday

1. Which states share a border with Oregon?

2. Which states are north of California?

The Pacific Region of the United States

Thursday

1. Which states border Canada?

2. Which state borders Mexico?

Friday

1. Which state is the largest in land area? Which two oceans border the state?

2. Which state is farthest north? Which state is farthest south?

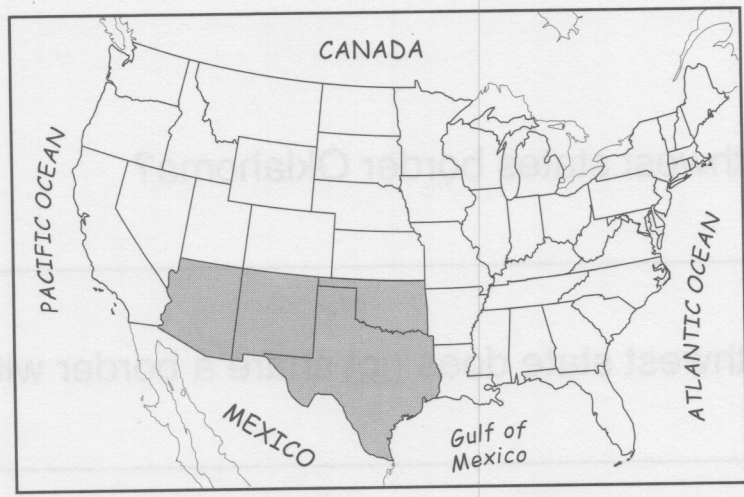
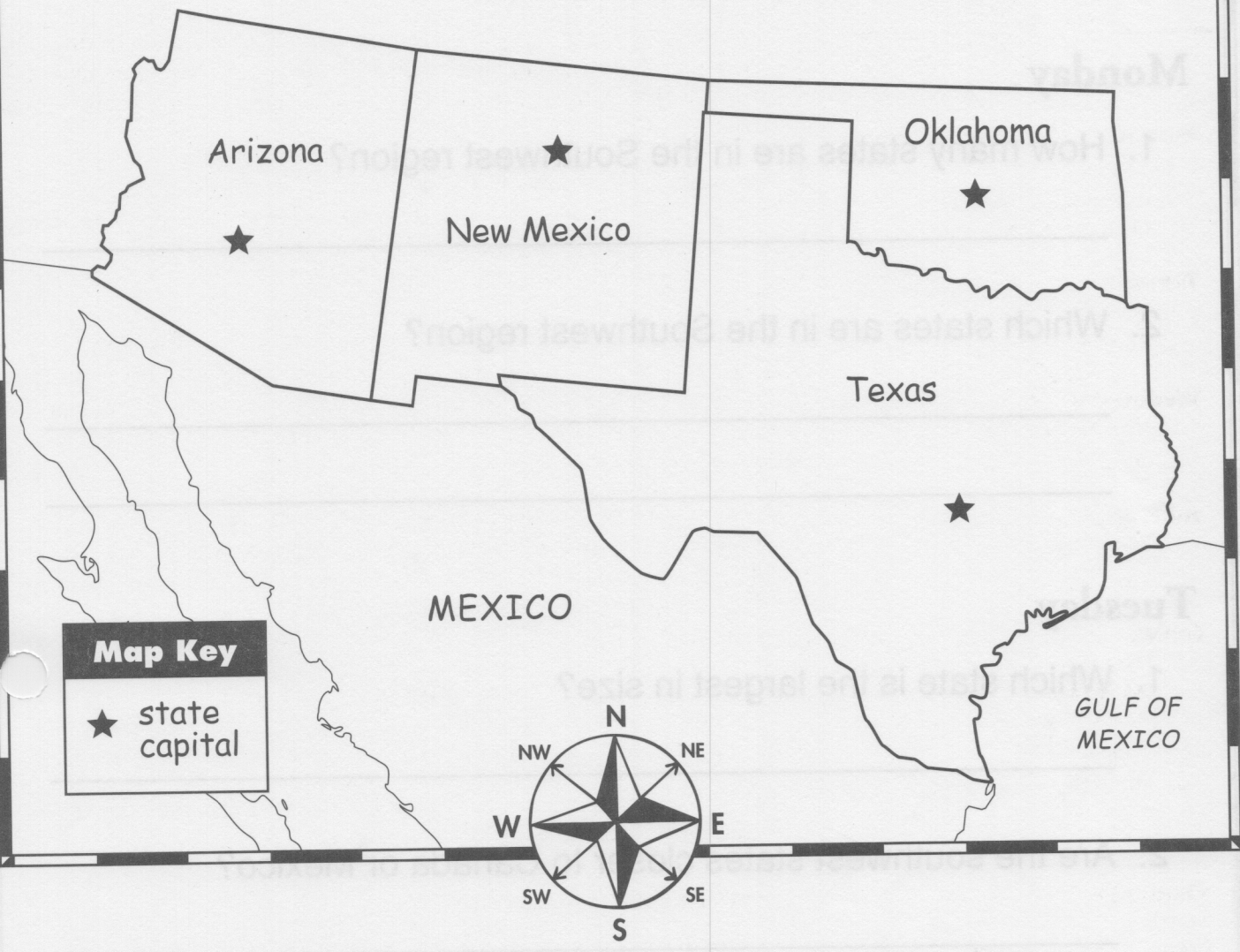
Challenge

Part 1: Draw a line from the state to its capital. The first one has been completed for you. Use a United States map to help you.

State	Capital
Alaska	Salem
California	Olympia
Hawaii	Sacramento
Oregon	Juneau
Washington	Honolulu

Part 2: On the map, write the name of each capital next to the star on each state.

The Southwest Region of the United States



The Southwest Region of the United States

Monday

- How many states are in the Southwest region?

- Which states are in the Southwest region?

Tuesday

- Which state is the largest in size?

- Are the southwest states closer to Canada or Mexico?

Wednesday

- Which southwest states border Oklahoma?

- Which southwest state does not share a border with Mexico?

The Southwest Region of the United States

Thursday

- Which state has the longest border with Mexico?

- Which state borders California, New Mexico, Nevada, and Utah?

Friday

- Name all the borders of Texas that are labeled on the map.

- Why are Arizona, New Mexico, Oklahoma, and Texas called a region?

Challenge

Part 1: Draw a line from the state to its capital. The first one has been completed for you. Use a United States map to help you.

State	Capital
Arizona	Oklahoma City
New Mexico	Phoenix
Oklahoma	Austin
Texas	Santa Fe

Part 2: On the map, write the name of each capital next to the star on each state.