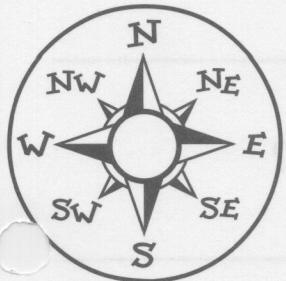
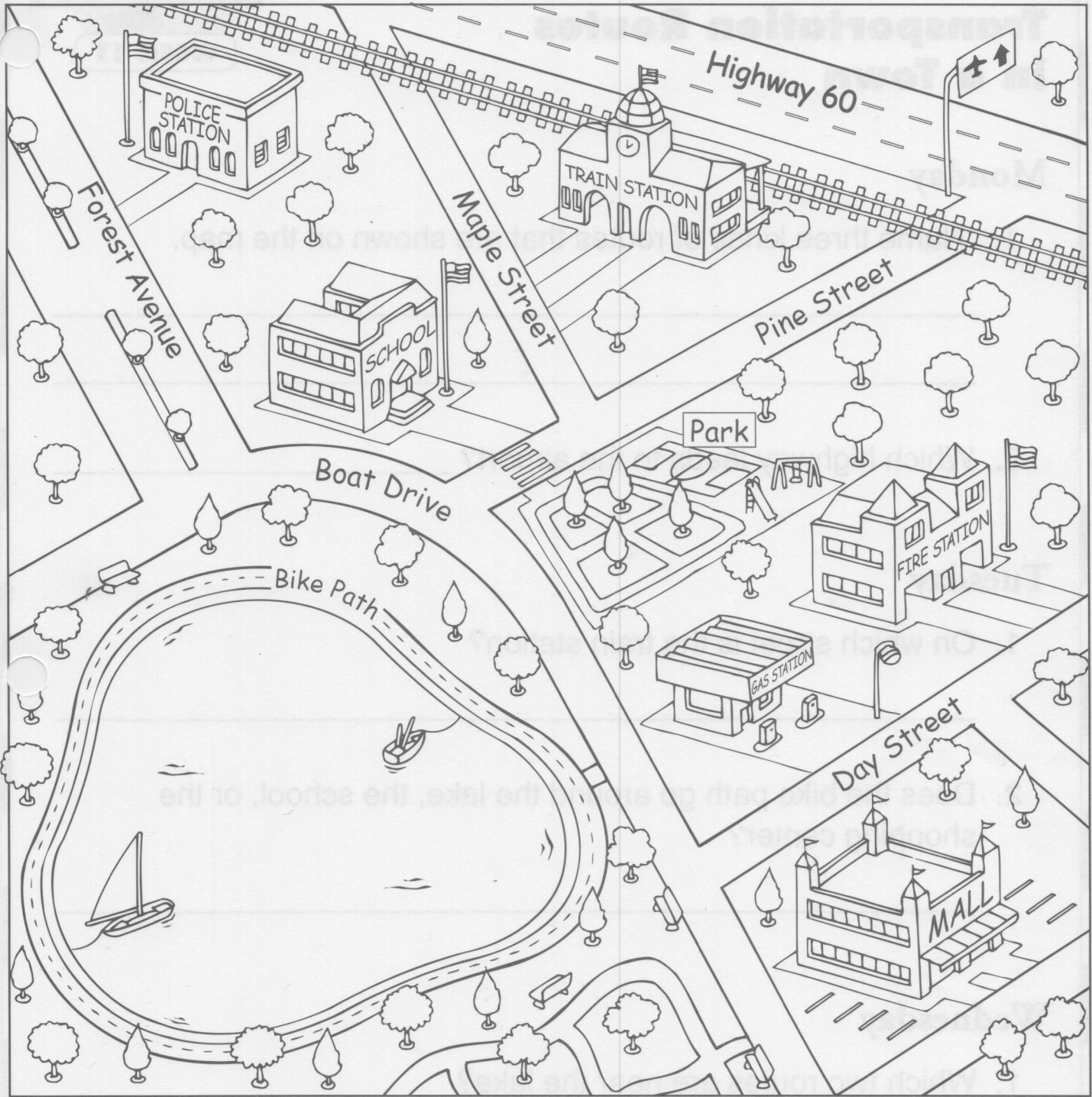


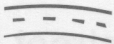



Transportation Routes in a Town



Map Key

 airport	 road or street	 bike path	 railroad tracks
--	---	--	--



Transportation Routes in a Town

Monday

1. Name three kinds of routes that are shown on the map.

2. Which highway leads to the airport? _____

Tuesday

1. On which street is the train station? _____

2. Does the bike path go around the lake, the school, or the shopping center? _____

Wednesday

1. Which two routes are, near the lake? _____

2. On which street is the entrance to the police station? _____



Transportation Routes in a Town

Thursday

1. In which direction do the train tracks run? _____

2. Which streets cross the train tracks? _____

Friday

1. Which street do you cross to get from the school to the park? _____


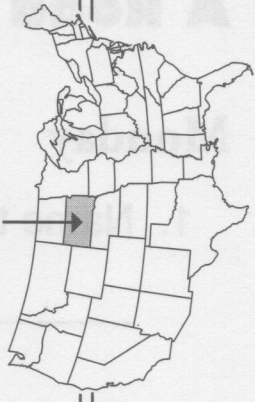
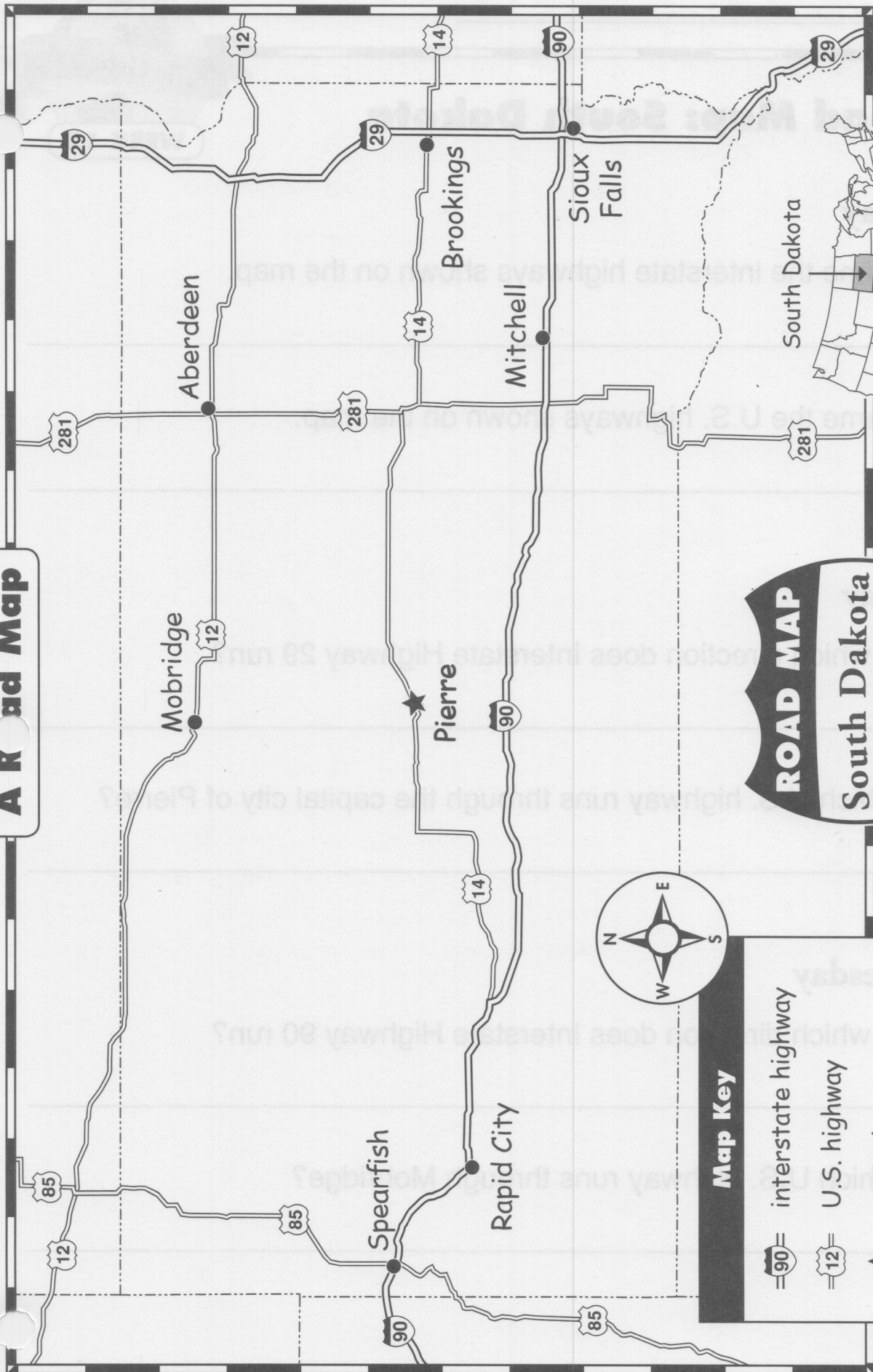
2. Which route runs alongside the railroad tracks? _____

Challenge

Use a blue marker to highlight the bike path on the map.

A Road Map

Name _____



Map Key

- interstate highway
- U.S. highway
- capital
- city
- state border



A Road Map: South Dakota

WEEK 12

Monday

1. Name the interstate highways shown on the map.

2. Name the U.S. highways shown on the map.

Tuesday

1. In which direction does Interstate Highway 29 run?

2. Which U.S. highway runs through the capital city of Pierre?

Wednesday

1. In which direction does Interstate Highway 90 run?

2. Which U.S. highway runs through Mobridge?



A Road Map: South Dakota

WEEK 12

Thursday

1. Which interstate highway runs through the city of Mitchell?

2. Name the cities along Interstate 29.

Friday

1. Which U.S. highways intersect in the city of Aberdeen?

2. Which interstate highway joins U.S. Highway 14?

Challenge

- Highlight the routes of the interstate highways in yellow.
- Highlight the routes of the U.S. highways in orange.



Waterways of the United States

WEEK 13

Monday

1. Which four kinds of waterways are shown on the map?

2. How many rivers are shown on the map? _____

Tuesday

1. Which states does the Arkansas River run through?

2. Which river runs through Alaska?

Wednesday

1. Name the oceans that border the U.S.

2. Which two states share the Columbia River?



Waterways of the United States

WEEK 13

Thursday

1. Name three of the Great Lakes.

2. The St. Lawrence River flows out of which lake?

Friday

1. Name three of the states that share the Colorado River.

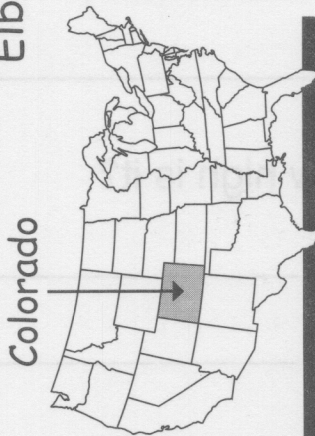
2. Which three rivers on this map flow into the Mississippi River?

Challenge







- Trace all the rivers in dark blue.
- Color the Great Lakes light blue.
- Color the oceans and the Gulf of Mexico blue-green.

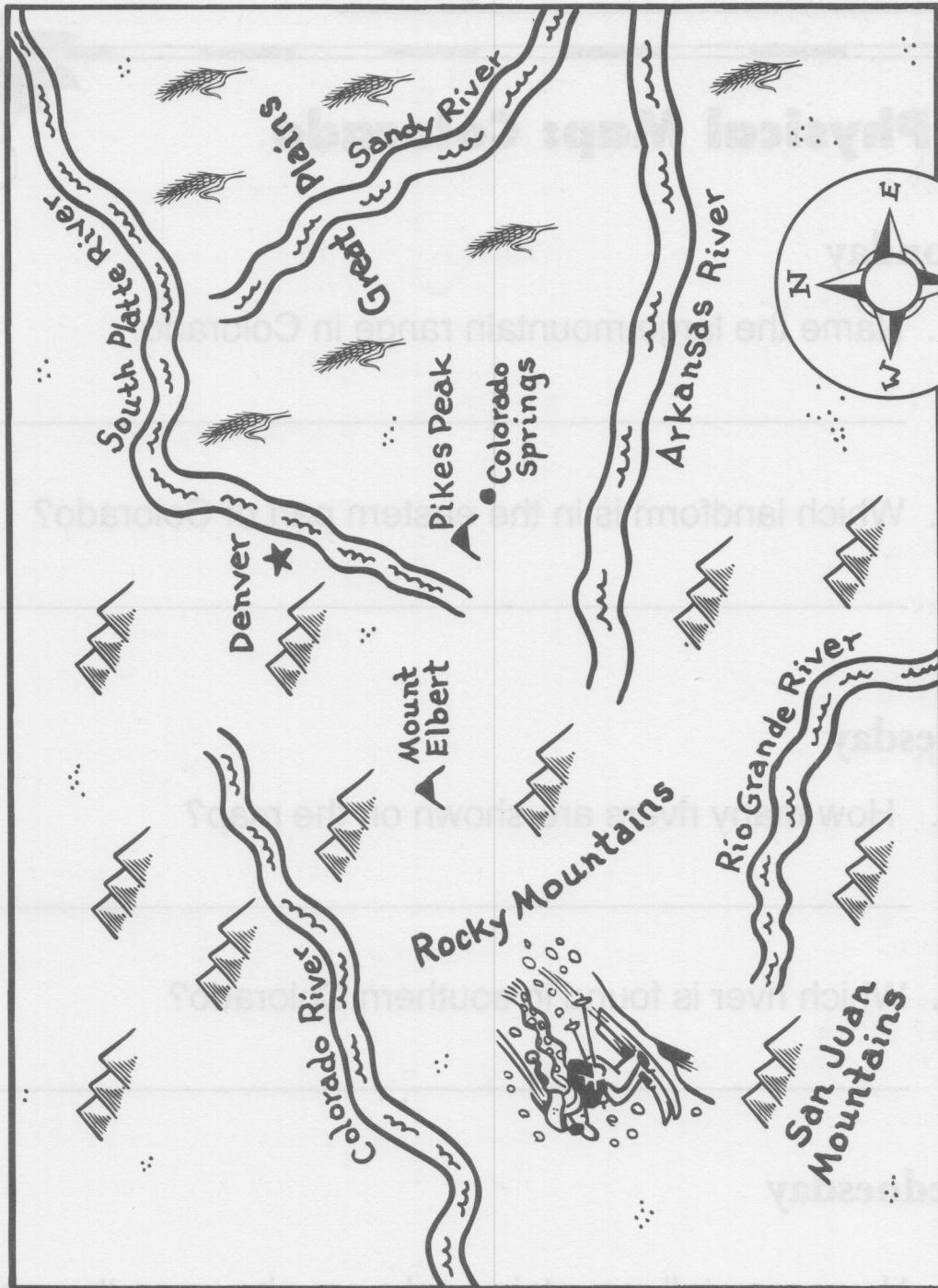
A Physical Map: Colorado

Colorado has more than 50 tall mountain peaks. Mount Elbert is the highest. It is 14,433 feet (4,399 m) high.



Key

-  plains
-  mountain range
-  mountain peak
-  river
-  city
-  capital





A Physical Map: Colorado

Monday

1. Name the large mountain range in Colorado.

2. Which landform is in the eastern part of Colorado?

Tuesday

1. How many rivers are shown on the map?

2. Which river is found in southern Colorado?

Wednesday

1. How many tall mountain peaks are shown on the map?

2. Which mountain peak is the highest? How high is it?



A Physical Map: Colorado

Thursday

1. Are the Rocky Mountains east or west of the capital?

2. Which river runs through the northeast part of Colorado?

Friday

1. Which activity would people most likely do in the Rocky Mountains—snow ski or water ski?

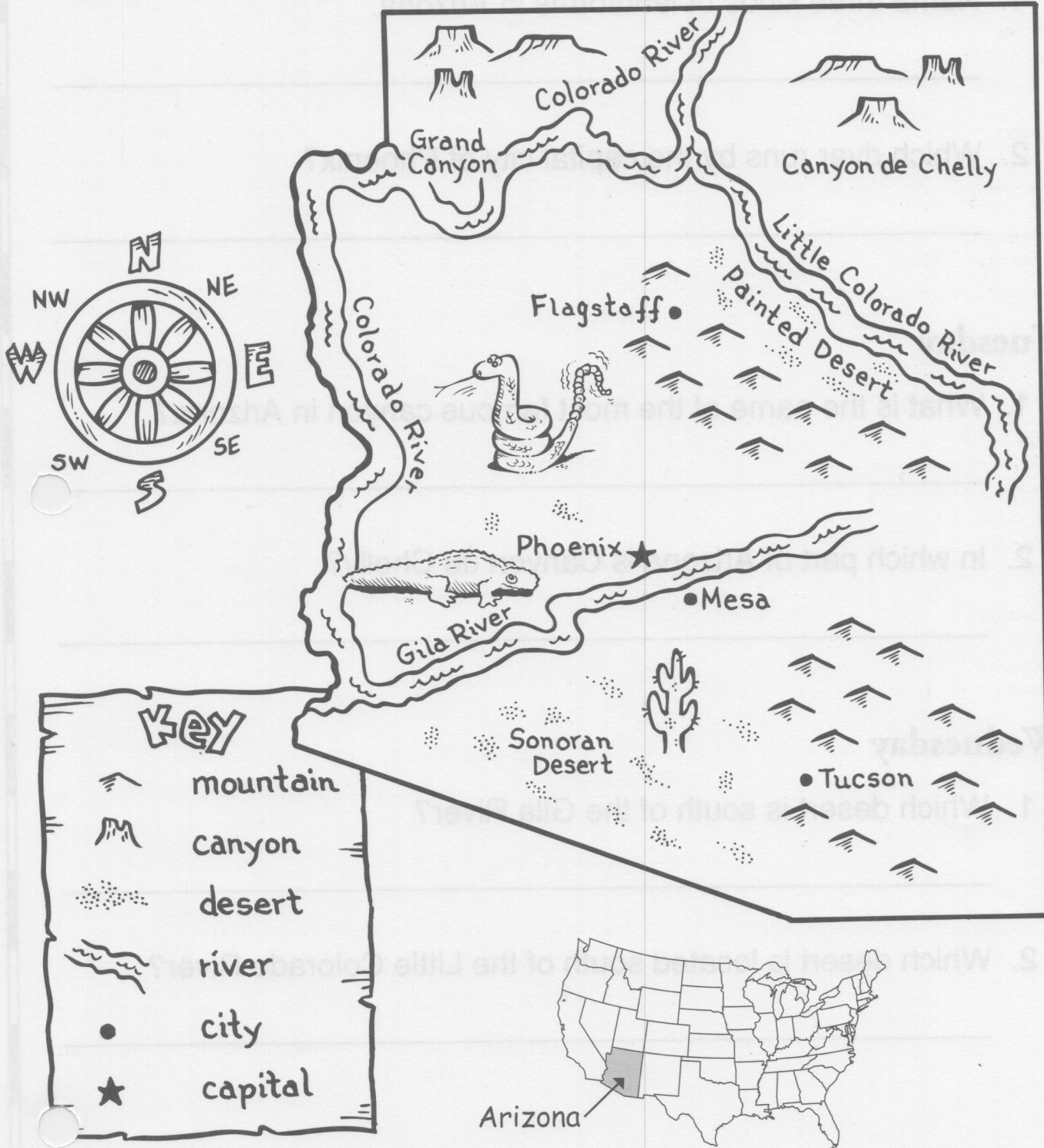
2. Which is most likely found in the Great Plains—wheat fields or gold mines?

Challenge







Colorado has 12 national forests. They are mostly in the western half of the state. On the map, draw several trees west of Denver. Draw a picture of a tree and write the word **forest** in the map key.

A Physical Map: Arizona

Arizona is known as the "Grand Canyon State." The Grand Canyon is 277 miles (443 km) long. It is 15 miles (24 km) wide. The canyon is more than a mile (1.6 km) deep. The Colorado River runs along the base of the canyon.



Key

-  mountain
-  canyon
-  desert
-  river
-  city
-  capital



A Physical Map: Arizona

Monday

1. Name three kinds of landforms in Arizona.

2. Which river runs by the capital city of Phoenix?

Tuesday

1. What is the name of the most famous canyon in Arizona?

2. In which part of Arizona is Canyon de Chelly?

Wednesday

1. Which desert is south of the Gila River?

2. Which desert is located south of the Little Colorado River?



A Physical Map: Arizona

Thursday

1. In which part of the state is the Grand Canyon located?

2. Which river lies at the base of the Grand Canyon?

Friday

1. What is Arizona's nickname?

2. Name a state or country that borders Arizona.

Challenge

The Grand Canyon and the Painted Desert are very colorful. Color the Grand Canyon and the Painted Desert in shades of yellow, brown, red, and pink.