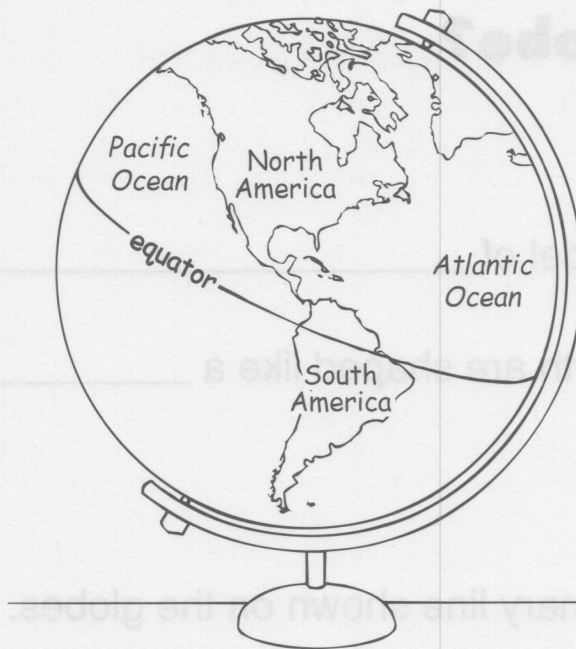
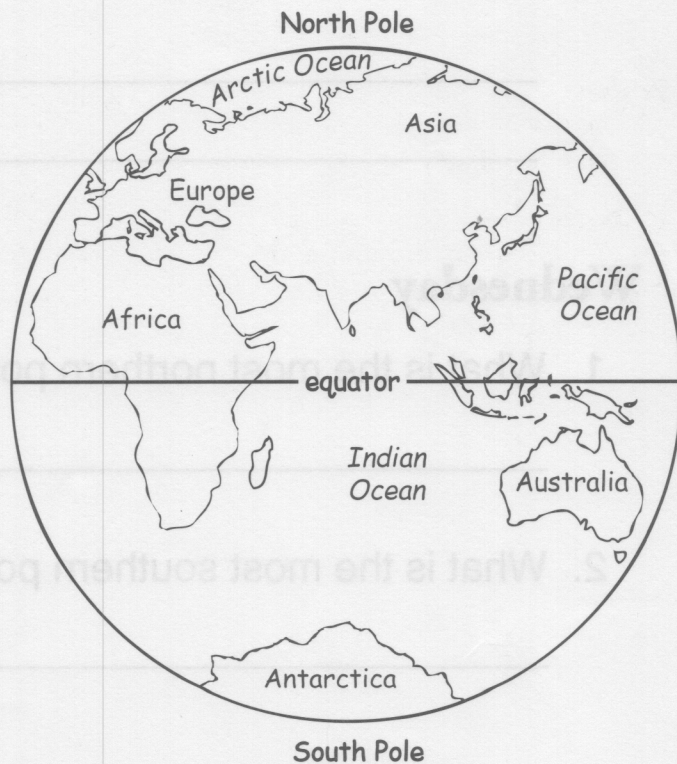
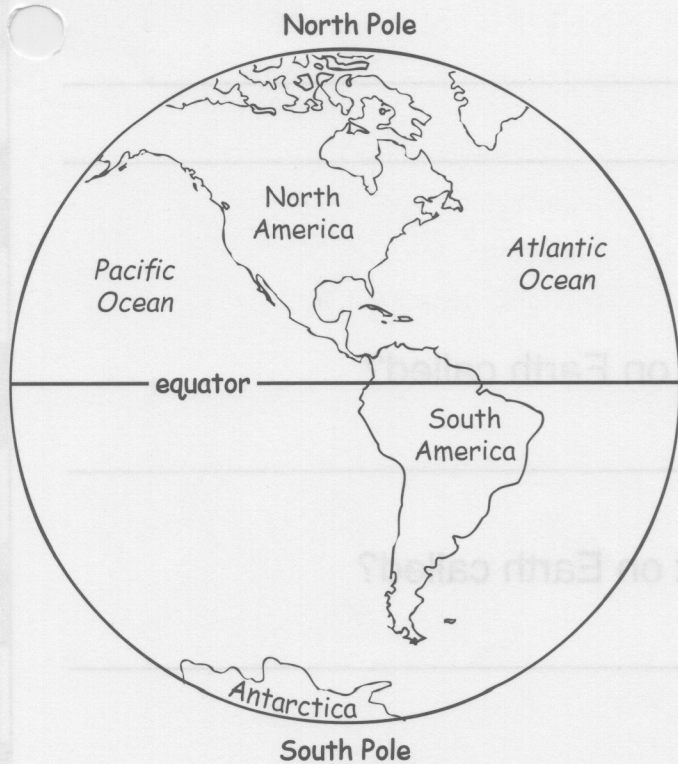


What Is a Globe?



A globe is a model of Earth. It is shaped like a ball.



A globe shows an imaginary line called the equator. The equator runs around the center of the Earth.



What Is a Globe?

Monday

1. A globe is a model of _____.
2. A globe and Earth are shaped like a _____.

Tuesday

1. Name the imaginary line shown on the globes.

2. Name two continents.

Wednesday

1. What is the most northern point on Earth called?

2. What is the most southern point on Earth called?



What Is a Globe?

Thursday

1. Is Australia south or north of the equator?

2. Is most of South America north or south of the equator?

Friday

1. In which continent do you live?

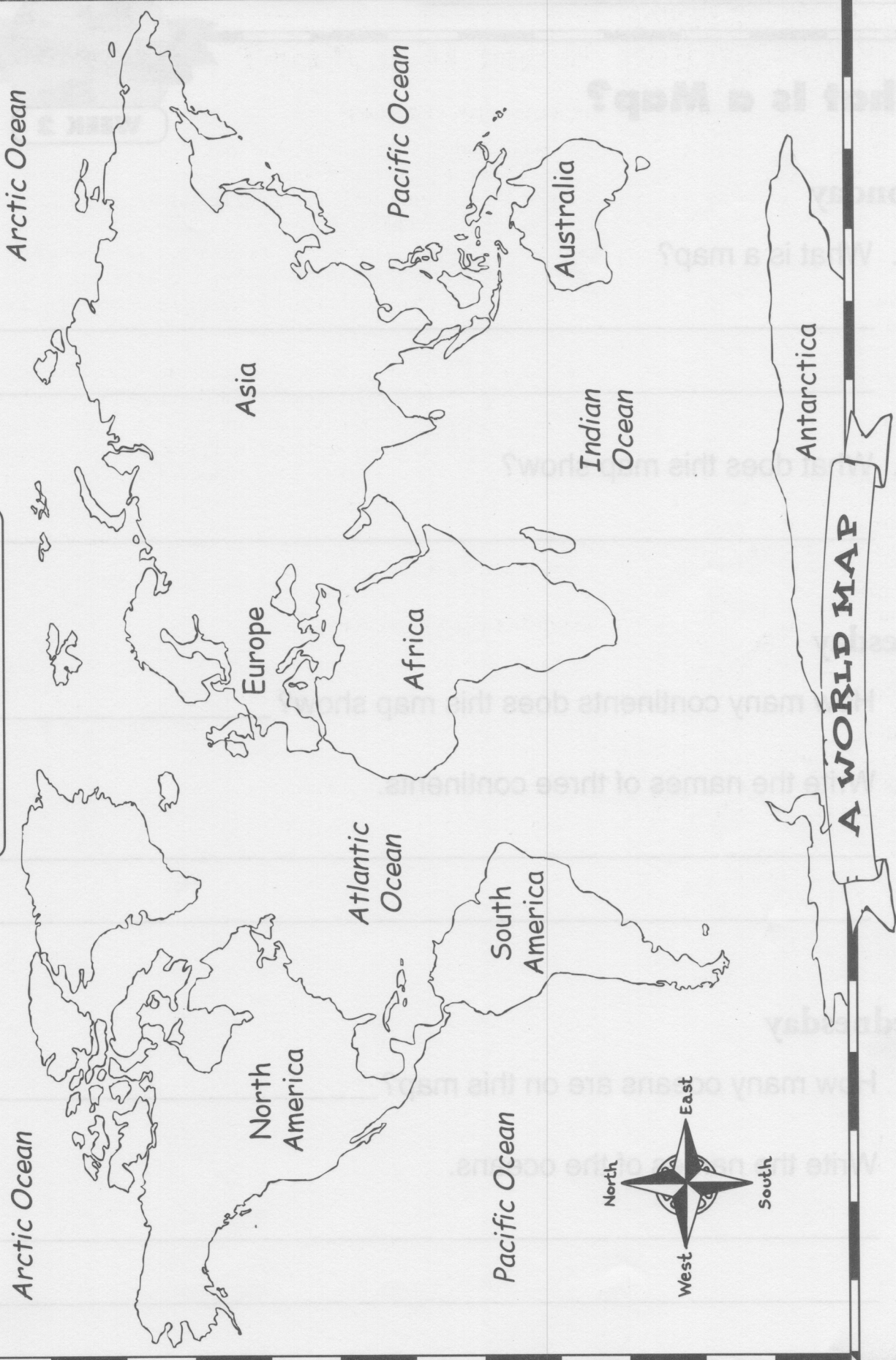
2. Do you live north or south of the equator?

Challenge

On all three globes, color the oceans blue.
Color the continents green.

What is a Map?

Name _____



This map is a drawing of the world. It shows the seven continents. It also shows the four oceans.

What Is a Map?**Monday**

1. What is a map?

2. What does this map show?

Tuesday

1. How many continents does this map show?

2. Write the names of three continents.

Wednesday

1. How many oceans are on this map?

2. Write the names of the oceans.

What Is a Map?**Thursday**

1. Which continents border the Atlantic Ocean?

2. Which two continents do not touch any other continent?

Friday

1. On which continent do you live?

2. Which continent is your closest neighbor?

Challenge

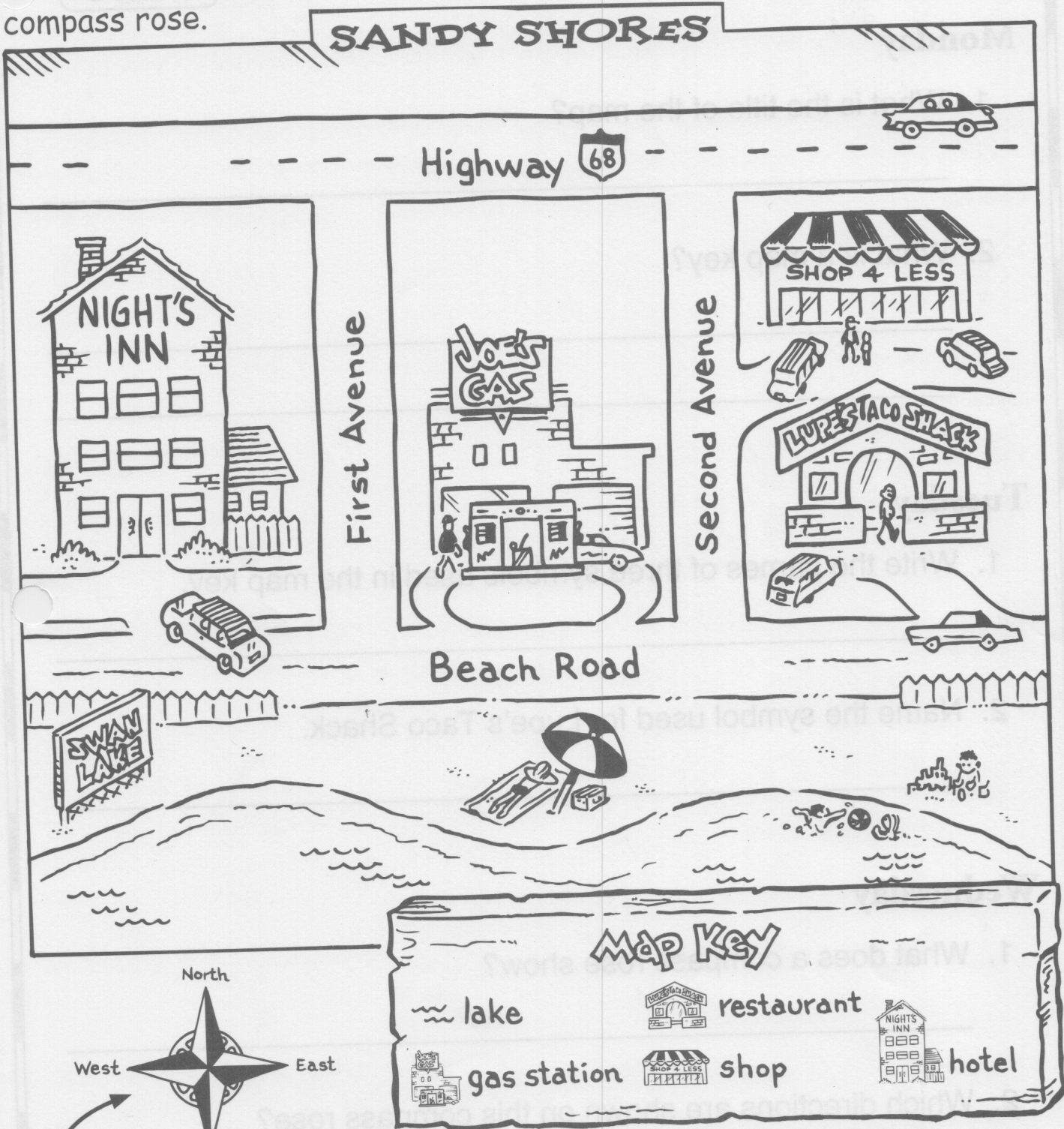
- Color the oceans blue.
- Color North America yellow.
- Color South America red.
- Color Antarctica gray.
- Color Africa purple.
- Color Europe orange.
- Color Asia green.
- Color Australia brown.

Name _____

Parts of a Map

The parts of the map include title, a map key, and a compass rose.

This is the title. The title tells the name of the map.



This is a compass rose. It shows directions on a map.

This is the map key. It has symbols that stand for something on the map.

Parts of a Map**Monday**

1. What is the title of the map?

2. What is a map key?

Tuesday

1. Write the names of three symbols used in the map key.

2. Name the symbol used for Lupe's Taco Shack.

Wednesday

1. What does a compass rose show?

2. Which directions are shown on this compass rose?

Parts of a Map**Thursday**

1. How many avenues are on this map? What are their names?

2. Does Highway 68 run east and west, or north and south?

Friday


1. Is Night's Inn on the west or east end of Beach Road?

2. Which two businesses are east of Second Avenue?


Challenge

What would you call this small town? Write a new title for this map. Write the new title on the map.

Intermediate Directions


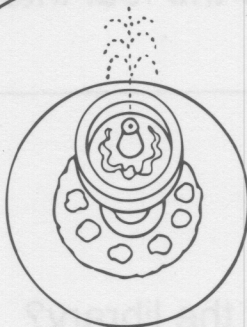


Main Street



Main Street

First Avenue



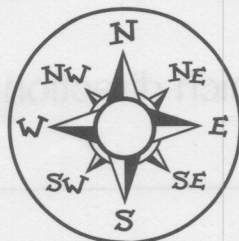
LIBRARY

First Avenue



POST OFFICE

N, S, E, and W
are cardinal directions.



NE, NW, SE, and SW are
the intermediate directions.

Intermediate Directions**Monday**

1. What are the intermediate directions on the compass rose?

2. Write the letters used for the four intermediate directions.

Tuesday

1. Which building is east of the library?

2. Which building is southwest of the school?

Wednesday

1. Start at the post office. In which direction is the police station?

2. Start at the library. In which direction is the school?

Intermediate Directions**Thursday**

1. Which building is northwest of the post office?

2. Does First Avenue run east and west or north and south?

Friday

1. Start at the west end of Main Street. In which direction is the fountain?

2. What is found where Main Street and First Avenue cross?

Challenge

On the map, draw a book in the southeast corner of the library. Draw a flagpole in the southwest corner of the school.

A Map Grid

	1	2	3	4	5
A					
B					
C					
D					
E					

KEY



Playground



Basketball



Picnic area



Water fountain



Baseball



Path



Park bench



Woods

A Map Grid



Monday

1. In which square would you find the park entrance?

2. In which square would you go to play basketball?

Tuesday

1. In which square can you get a drink of water?

2. In which square can you rest on a park bench?

Wednesday

1. How many squares does the picnic area include?

2. Name the squares for the picnic area.

A Map Grid



Thursday

1. How many squares does the baseball diamond include?

2. Name the squares for the baseball area.

Friday

1. What is above square E5?

2. The playground equipment is in which four squares?

Challenge

Find square C2. Draw a picture in this square of something you might see in a park.